

Name _____

Period _____

Date _____

**WHOLE NUMBER MULTIPLICATION AND DIVISION (NBT1)
Essentials Pre-Assessment**

1. Grace multiplied $7 \bullet 9$. Explain her strategy.

$$7(10) = 70 \rightarrow 7(1) = 7 \rightarrow 70 - 7 = 63 \rightarrow 7 \times 9 = 63$$

2. Find each product.

a. $6 \bullet 8$	b. $60 \bullet 8$	c. $60 \bullet 80$	d. $80 \bullet 6$
------------------	-------------------	--------------------	-------------------

3. Multiply $18(121)$ using an area model.	4. Divide 767 by 13 using the chunking method.
--	--

5. Compute each product using the standard algorithm.

a. 19×85	b. $5,670 \div 35$
-------------------	--------------------

Name _____

Period _____

Date _____

FRACTION CONCEPTS AND EQUIVALENCE (FR1) Essentials Pre-Assessment

6. Write inequalities to compare the unit fractions $\frac{1}{5}$, $\frac{1}{3}$, $\frac{1}{7}$, and $\frac{1}{8}$.

<div style="border: 1px solid black; width: 40px; height: 40px; margin: 0 auto;"></div>	<	<div style="border: 1px solid black; width: 40px; height: 40px; margin: 0 auto;"></div>	<	<div style="border: 1px solid black; width: 40px; height: 40px; margin: 0 auto;"></div>	<	<div style="border: 1px solid black; width: 40px; height: 40px; margin: 0 auto;"></div>
---	---	---	---	---	---	---

7. Estimate the location of each number below on the number line.

0 1 $\frac{3}{6}$ $\frac{7}{9}$ $\frac{3}{12}$ $\frac{1}{3}$ $\frac{11}{12}$



8. Choose ALL of the numbers that are equivalent to $\frac{18}{4}$.

A. $\frac{9}{2}$

B. $3\frac{3}{4}$

C. $4\frac{1}{4}$

D. $4\frac{1}{2}$

9. A number has a numerator of 12 and is equivalent to $\frac{2}{3}$. What is its denominator?

10. Explain how to use common denominators to compare $\frac{2}{7}$ and $\frac{1}{3}$.

11. Write each pair of fractions using a common denominator. Then circle the fraction in each pair with the greater value.

a. $\frac{3}{4}$ and $\frac{4}{5}$

b. $\frac{4}{7}$ and $\frac{2}{3}$

Name _____

Period _____

Date _____

FRACTION ADDITION AND SUBTRACTION (FR2)
Essentials Pre-Assessment

12. Use mental math to find the sum.

a. $\frac{3}{12} + \frac{4}{12} + \frac{1}{12}$	b. $1\frac{5}{6} + 2 + 8\frac{1}{6}$
---	--------------------------------------

13. Without calculating, estimate each sum or difference.

a. $3\frac{1}{7} + 2\frac{1}{11}$ Closer to 5 Closer to 6	b. $4\frac{4}{5} - 3\frac{1}{8}$ Closer to 1 Closer to 2
---	--

14. Find the following differences.

a. $\frac{11}{12} - \frac{3}{4}$	b. $6\frac{2}{5} - 4\frac{2}{3}$
----------------------------------	----------------------------------

15. Find the following sums.

a. $\frac{5}{6} + \frac{1}{3}$	b. $4\frac{1}{4} + 2\frac{2}{3}$
--------------------------------	----------------------------------

16. Lucy is baking a cake that requires $4\frac{2}{3}$ cups of flour. She only has $2\frac{1}{4}$ cups of flour and wants to borrow some from her neighbor.

How much flour does she need from her neighbor?

17. Ignatius added these proper fractions this way: $\frac{3}{4} + \frac{3}{5} = \frac{6}{9}$.a. Explain why his result of $\frac{6}{9}$ does not make sense.

b. Find the correct sum. Show work.

Name _____

Period _____


Date _____

FRACTION MULTIPLICATION AND DIVISION (FR3)


Essentials Pre-Assessment Answer Key

18. Ervin was trying to create an area model to compute $\frac{1}{2} \times \frac{1}{3}$. Which of the area models below could he use to answer the question? Choose ALL that apply.


A.




B.



C.



D.



19. Compute.

a. $\frac{3}{4} \left(\frac{5}{6} \right)$

b. $\frac{11}{12} \cdot 4$

c. $2 \cdot 1\frac{3}{5}$

d. $2\frac{2}{3} \left(1\frac{5}{8} \right)$

20. Six advisory classes want to split $7\frac{1}{2}$ pizzas equally. How much pizza will each advisory class get? Use a division procedure or diagram to justify your answer.

21. Compute using any method.

a. $\frac{5}{8} \div \frac{1}{4}$

b. $3\frac{1}{2} \div 2\frac{1}{3}$

22. Tyler notices that dividing a number by $\frac{1}{2}$ gives the same result as multiplying the number by 2. Critique Tyler's conjecture using supporting examples or counterexamples.